


Canlıların hareketleri ve sesleri- yaşam alanları etkinliği

1. Aşağıdaki canlıların hangisi sürünerek hareket eder?



2. Aşağıdaki canlılardan hangisi uçarak hareket eder?




3. Aşağıdaki canlıların hangisi yüzerek hareket eder?



4. Aşağıdakilerin hangisi canlıdır?



5. Aşağıdaki canlıların hangisi hareket etmez?





6. Aşağıdakilerden hangisi yanlıştır?

A Bütün canlılar ölürler.


B Bütün canlılar beslenirler.

C Bütün canlılar uçarlar.



7. Aşağıdaki canlılardan hangisi dört ayaklıdır?




8. Aşağıdakilerden hangisi hav hav diye ses çıkarır?




9. Aşağıdakilerden hangisi vız vız diyerek ses çıkarır?



10. Aşağıdakilerden hangisi kükür?



11. Aşağıdakilerden hangisi güzel sesiyle bizi dinlendirir?





12. Aşağıdakilerden hangisi yanlıştır?

A Kedi miyavlar



B Kuzular meler

C Horoz vızıldar.




13. Aşağıdakilerden hangisi yumurtlamaz?






14. Aşağıdakilerden hangisi yavrusunu emzirir?






15. Aşağıdakilerden hangisi zehirsiz bir hayvandır?





16. Aşağıdakilerden hangisi cansızdır?





17. Aşağıdakilerden hangisi 'möö mööö' diyerek ses çıkarır?




18. Aşağıdakilerden hangisi gıt gıt gıdak diyerek ses çıkarır?



19. Elif yazın dedesinin köyüne gitti. Köyde ahır vardı. Ahırda hangi hayvanı göremez?



20. Aşağıdakilerden hangisi evcil bir hayvandır?




21. Aşağıdakilerden hangisi bütün canlılar için gereklidir?

A Ayakkabı

B Elbise

C Su

22. En az hareketi aşağıdakilerden hangisi yapar?



23. Aşağıdakilerden hangisi yanlıştır?

A Bütün canlılar için, Güneş gereklidir.

B Bütün canlılar beslenir.

C Bütün canlılar uçar.



24. Aşağıdakilerden hangisi doğrudur ?

A Bütün canlılar doğurur.


B Bütün canlılar yumurtlar

C Bütün canlılar ölür.

Aşağıdaki canlıları yaşadıkları yerlerle eşleştiriniz



İn



Kulübe



Ahır




Kovan





Kümes



Ağıl



Yuva




Aşağıdaki canlıları çıkardıkları seslere göre eşleştirelim

Vizzz vizzzzzzz




Ürrrrrüü üüüüüüü




Hav havvv



Cik cik



Gıt gıt gıdakkk



Miyavvv miyavv



Ai aiiiii...



Meeee meeeee



Möööö möööööööö...



Sssss sssssssss

